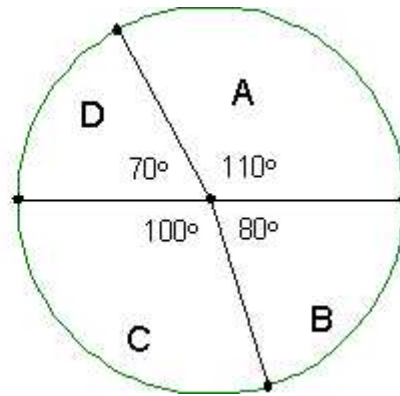
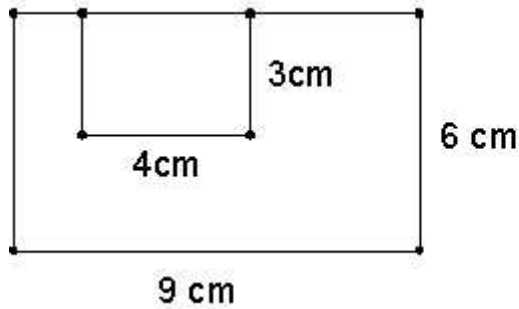


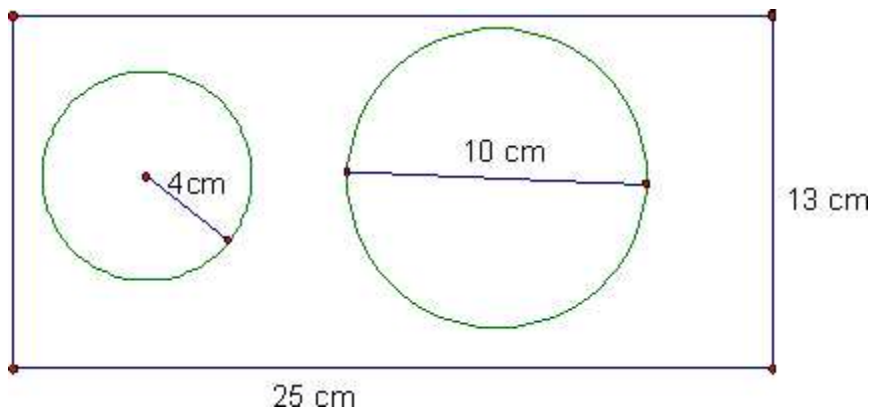
Algebra 6-6 Probability Without Counting



- In the rectangular credit card above, what is the probability that if my card got scratched, it would get scratched across the small rectangular part that has a picture of my face on it?

- Determine the what the probability is that if you spin the spinner above, it will land in the given region.

A = _____ B = _____ C = _____ D = _____



- What is the probability that if you threw something at the above board blindfolded, it would land in one of the circles?
